

Kindergarten · Word problems — add & subtract  
Printable from k5genie.com

Worksheet 44 · Word problems — add & subtract


#1

Sam has 3 apples. He gets 2 more. How many apples does Sam have?



#2

There are 8 fish in a tank. 3 swim into a cave. How many fish can you still see?



#3

Mia picks 5 flowers. Her friend gives her 4 more. How many flowers does Mia have?



#4

A basket has 10 apples. 6 are eaten. How many apples are left?



#5

Ben has 7 bananas. He eats 2 of them. How many bananas are left?




#6

Jake sees 6 cats. Then 3 more cats come. How many cats are there now?



#7

There are 9 dogs at the park. 4 dogs go home. How many dogs are left?




#8

Emma sees 2 butterflies. Then 5 more fly in. How many butterflies in all?



#9

A bowl has 10 oranges. 4 are taken. How many oranges are left?



#10

Lily sees 1 bee. Then 8 more bees come. How many bees are there?



#11

There are 7 dogs. Then 2 more dogs arrive. How many dogs are there now?



#12

Tom has 9 toy cats. He gives 5 away. How many toy cats are left?

