


Kindergarten · Ten frames — write the addition
Printable from k5genie.com


Worksheet 8 · Ten frames — write the addition

#1




$\square + \square = \square$

#2




$\square + \square = \square$

#3




$\square + \square = \square$

#4




$\square + \square = \square$

#5




$\square + \square = \square$

#6




$\square + \square = \square$

#7




$\square + \square = \square$

#8




$\square + \square = \square$

#9



$\square + \square = \square$

#10



$\square + \square = \square$