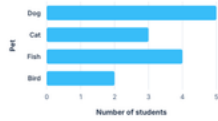


Worksheet 40 · Read picture graphs

#1 The graph shows pets in our class.



How many more dogs than cats?

more students

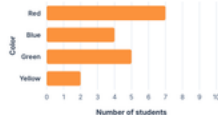
#2 The graph shows fruit snacks chosen.



How many apples and oranges were chosen?

snacks

#3 The graph shows favorite colors.



How many fewer yellow than red?

fewer students

#4 The graph shows toys at recess.



How many children chose a ball or doll?

children

#5 The graph shows books read this week.



How many more books on Thursday than Monday?

more books

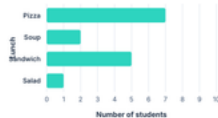
#6 The graph shows stickers earned.



How many star and smile stickers in all?

stickers

#7 The graph shows lunch choices.



How many students chose pizza or soup?

students


#8 The graph shows bugs found.



How many more ants than beetles?

more bugs

#9 The graph shows flowers in a garden.



How many roses and tulips in all?

flowers

#10 The graph shows minutes of reading.



How many more minutes did Sam read than Kai?

minutes

#11 The graph shows shapes drawn.



How many circles and squares were drawn?

shapes

#12 The graph shows weather this month.



How many sunny and rainy days in all?

days