

Worksheet 64 · Read bar graphs


#1 The bar graph shows books read by students in April.



How many more books did Lee read than Sam?

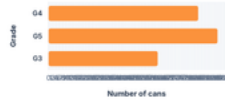
more books

#2 The bar graph shows miles run during practice.



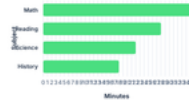
How many miles were run on Tuesday and Thursday?  miles

#3 The bar graph shows cans collected for recycling.



How many more cans did G5 collect than G3?  cans

#4 The bar graph shows minutes spent on homework.



How many more minutes on math than science?  minutes

#5 The bar graph shows tickets sold for a play.



How many tickets were sold on Friday and Sunday?  tickets

#6 The bar graph shows points scored in four games.



How many fewer points in Game 2 than Game 3?  fewer points

#7 The bar graph shows plants in the school garden.



How many tomato and bean plants are there in all?  plants

#8 The bar graph shows pages written in a journal.



How many more pages in Week 4 than Week 1?  more pages

#9 The bar graph shows visitors to a museum exhibit.



How many visitors came in the morning and evening?  visitors

#10 The bar graph shows laps swum in practice.



How many more laps in Lane B than Lane C?  more laps

#11 The bar graph shows boxes of supplies delivered.



How many boxes of pencils and paper were delivered?  boxes

#12 The bar graph shows minutes of reading at home.



How many minutes were spent reading on Tuesday and Wednesday?  minutes