

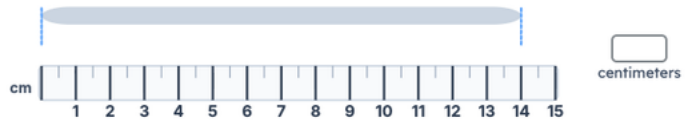
Worksheet 60 · Measure lengths (cm, m)

Read each ruler. Type the length in the units shown.

#1 What is the length of the paper clip?



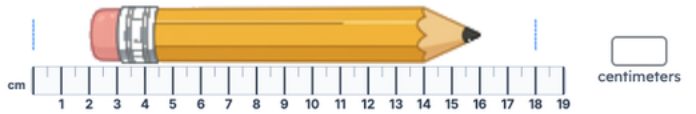
#2 What is the length of the marker?



#3 What is the length of the eraser?



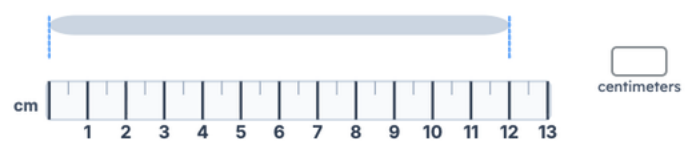
#4 What is the length of the pencil?



#5 What is the length of the crayon?



#6 What is the length of the book?



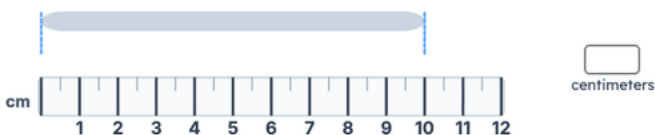
#7 What is the length of the key?



#8 What is the length of the leaf?



#9 What is the length of the glue stick?



#10 What is the length of the coin?



#11 What is the length of the stick?



#12 What is the length of the matchstick?

