


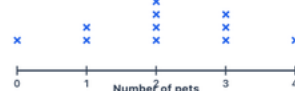
Worksheet 65 · Line plots — read data

#1 Students counted books read.




How many students read 3 books? students

#2 The line plot shows pets at home.



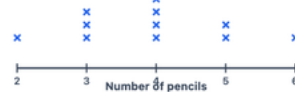
How many students have 2 pets? students

#3 Students recorded hours of reading.



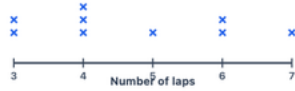
How many students read for 4 hours? students

#4 A class measured pencils in a pack.




How many packs had 4 pencils? packs

#5 Students logged laps around the track.




How many students ran 4 laps? students

#6 The line plot shows goals scored.



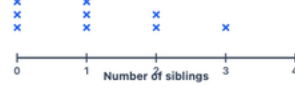
How many players scored 1 goal? players

#7 Students counted stickers in a row.




How many students had 4 stickers? students

#8 A survey asked about siblings.



How many students have 0 siblings? students

#9 Students tracked minutes of practice.




How many students practiced 20 minutes? students

#10 The line plot shows baskets made.




How many students made 3 baskets? students

#11 Students counted coins saved.



How many students saved 6 coins? students

#12 A class recorded spelling words correct.



How many students got 8 words correct? students