

Worksheet 62 · Count money — bills and coins


Add up the money. Type your answer in cents.

#1
What is the total value?



cents

#2
What is the total value?




cents

#3
What is the total value?




cents

#4
What is the total value?



cents

#5
What is the total value?



cents

#6
What is the total value?



cents

#7
What is the total value?



cents

#8
What is the total value?



cents

#9
What is the total value?




cents

#10
What is the total value?




cents

#11
What is the total value?



cents

#12
What is the total value?



cents