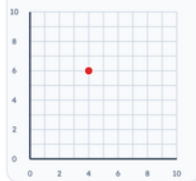
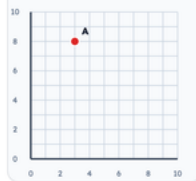
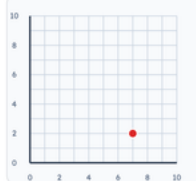
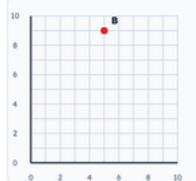
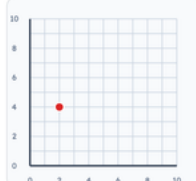
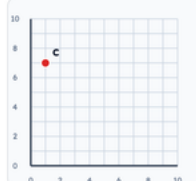
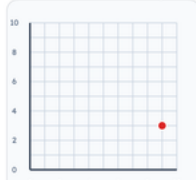
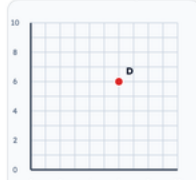
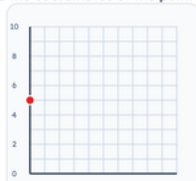
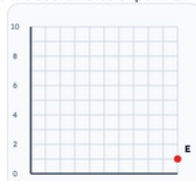
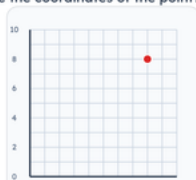
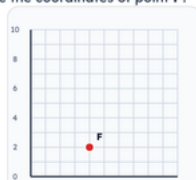


Grades 4–5 · Coordinates — read a point
Printable from k5genie.com

Worksheet 43 · Coordinates — read a point

Use the grid. Type coordinates or choose the shape name.

Read the coordinates of each point.

<p>#1 What are the coordinates of the point?</p>  <p>(<input type="text"/> , <input type="text"/>)</p>	<p>#2 What are the coordinates of point A?</p>  <p>(<input type="text"/> , <input type="text"/>)</p>
<p>#3 What are the coordinates of the point?</p>  <p>(<input type="text"/> , <input type="text"/>)</p>	<p>#4 What are the coordinates of point B?</p>  <p>(<input type="text"/> , <input type="text"/>)</p>
<p>#5 What are the coordinates of the point?</p>  <p>(<input type="text"/> , <input type="text"/>)</p>	<p>#6 What are the coordinates of point C?</p>  <p>(<input type="text"/> , <input type="text"/>)</p>
<p>#7 What are the coordinates of the point?</p>  <p>(<input type="text"/> , <input type="text"/>)</p>	<p>#8 What are the coordinates of point D?</p>  <p>(<input type="text"/> , <input type="text"/>)</p>
<p>#9 What are the coordinates of the point?</p>  <p>(<input type="text"/> , <input type="text"/>)</p>	<p>#10 What are the coordinates of point E?</p>  <p>(<input type="text"/> , <input type="text"/>)</p>
<p>#11 What are the coordinates of the point?</p>  <p>(<input type="text"/> , <input type="text"/>)</p>	<p>#12 What are the coordinates of point F?</p>  <p>(<input type="text"/> , <input type="text"/>)</p>