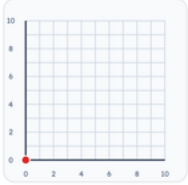
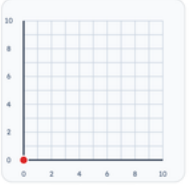
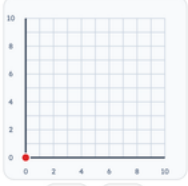
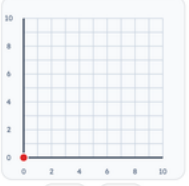
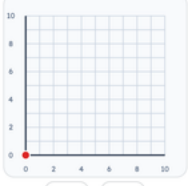
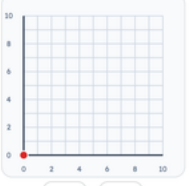
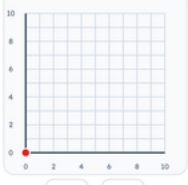
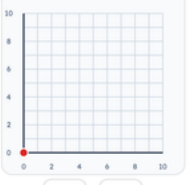
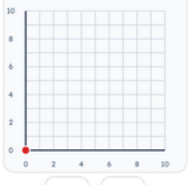
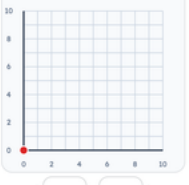
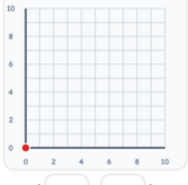
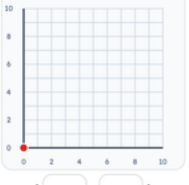


Grades 4–5 · Coordinates — plot a point
Printable from k5genie.com

Worksheet 48 · Coordinates — plot a point

Use the grid. Type coordinates or choose the shape name.

Plot each point on the coordinate grid.

<p>#1 Plot point Y at (2, 7). Tap the grid or type coordinates.</p>  <p>(<input type="text"/> , <input type="text"/>)</p>	<p>#2 Plot point Z at (6, 1). Tap the grid or type coordinates.</p>  <p>(<input type="text"/> , <input type="text"/>)</p>
<p>#3 Plot point A at (9, 6). Tap the grid or type coordinates.</p>  <p>(<input type="text"/> , <input type="text"/>)</p>	<p>#4 Plot point B at (0, 3). Tap the grid or type coordinates.</p>  <p>(<input type="text"/> , <input type="text"/>)</p>
<p>#5 Plot point C at (4, 9). Tap the grid or type coordinates.</p>  <p>(<input type="text"/> , <input type="text"/>)</p>	<p>#6 Plot point D at (7, 0). Tap the grid or type coordinates.</p>  <p>(<input type="text"/> , <input type="text"/>)</p>
<p>#7 Plot point E at (3, 5). Tap the grid or type coordinates.</p>  <p>(<input type="text"/> , <input type="text"/>)</p>	<p>#8 Plot point F at (8, 7). Tap the grid or type coordinates.</p>  <p>(<input type="text"/> , <input type="text"/>)</p>
<p>#9 Plot point G at (1, 4). Tap the grid or type coordinates.</p>  <p>(<input type="text"/> , <input type="text"/>)</p>	<p>#10 Plot point H at (5, 10). Tap the grid or type coordinates.</p>  <p>(<input type="text"/> , <input type="text"/>)</p>
<p>#11 Plot point I at (10, 4). Tap the grid or type coordinates.</p>  <p>(<input type="text"/> , <input type="text"/>)</p>	<p>#12 Plot point J at (2, 1). Tap the grid or type coordinates.</p>  <p>(<input type="text"/> , <input type="text"/>)</p>