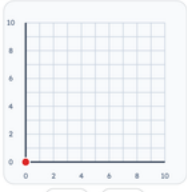
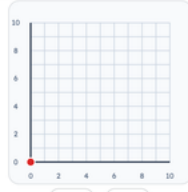
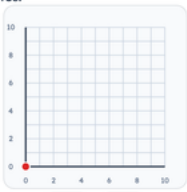
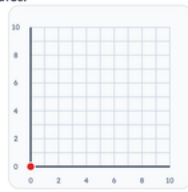
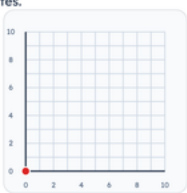
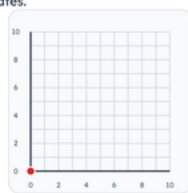
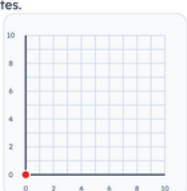
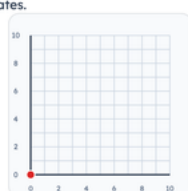
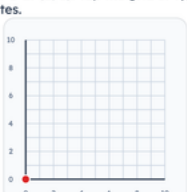

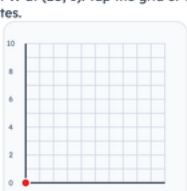



Grades 4–5 · Coordinates — plot a point
Printable from k5genie.com

Worksheet 47 · Coordinates — plot a point

Use the grid. Type coordinates or choose the shape name.

Plot each point on the coordinate grid.

<p>#1 Plot point M at (1, 2). Tap the grid or type coordinates.</p>  <p>(<input type="text"/> , <input type="text"/>)</p>	<p>#2 Plot point N at (5, 7). Tap the grid or type coordinates.</p>  <p>(<input type="text"/> , <input type="text"/>)</p>
<p>#3 Plot point O at (8, 1). Tap the grid or type coordinates.</p>  <p>(<input type="text"/> , <input type="text"/>)</p>	<p>#4 Plot point P at (2, 9). Tap the grid or type coordinates.</p>  <p>(<input type="text"/> , <input type="text"/>)</p>
<p>#5 Plot point Q at (4, 5). Tap the grid or type coordinates.</p>  <p>(<input type="text"/> , <input type="text"/>)</p>	<p>#6 Plot point R at (7, 8). Tap the grid or type coordinates.</p>  <p>(<input type="text"/> , <input type="text"/>)</p>
<p>#7 Plot point S at (3, 6). Tap the grid or type coordinates.</p>  <p>(<input type="text"/> , <input type="text"/>)</p>	<p>#8 Plot point T at (9, 4). Tap the grid or type coordinates.</p>  <p>(<input type="text"/> , <input type="text"/>)</p>
<p>#9 Plot point U at (0, 8). Tap the grid or type coordinates.</p>  <p>(<input type="text"/> , <input type="text"/>)</p>	<p>#10 Plot point V at (6, 3). Tap the grid or type coordinates.</p>  <p>(<input type="text"/> , <input type="text"/>)</p>
<p>#11 Plot point W at (10, 6). Tap the grid or type coordinates.</p>  <p>(<input type="text"/> , <input type="text"/>)</p>	<p>#12 Plot point X at (1, 10). Tap the grid or type coordinates.</p>  <p>(<input type="text"/> , <input type="text"/>)</p>