

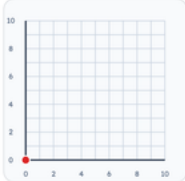
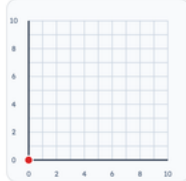
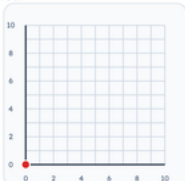
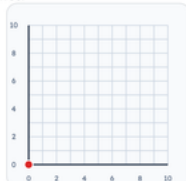
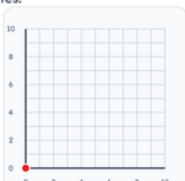
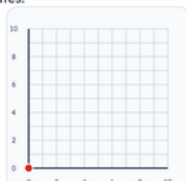
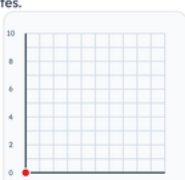
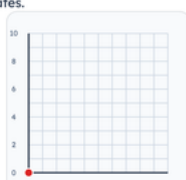
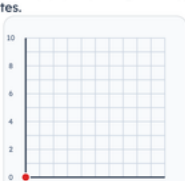
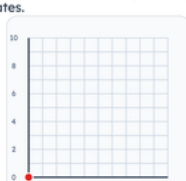

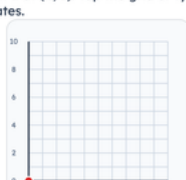
Grades 4–5 · Coordinates — plot a point

Printable from k5genie.com

Worksheet 46 · Coordinates — plot a point

Use the grid. Type coordinates or choose the shape name.

Plot each point on the coordinate grid.

<p>#1</p> <p>Plot point A at (4, 6). Tap the grid or type coordinates.</p>  <p>(<input type="text"/> , <input type="text"/>)</p>	<p>#2</p> <p>Plot point B at (3, 8). Tap the grid or type coordinates.</p>  <p>(<input type="text"/> , <input type="text"/>)</p>
<p>#3</p> <p>Plot point C at (7, 2). Tap the grid or type coordinates.</p>  <p>(<input type="text"/> , <input type="text"/>)</p>	<p>#4</p> <p>Plot point D at (5, 9). Tap the grid or type coordinates.</p>  <p>(<input type="text"/> , <input type="text"/>)</p>
<p>#5</p> <p>Plot point E at (2, 4). Tap the grid or type coordinates.</p>  <p>(<input type="text"/> , <input type="text"/>)</p>	<p>#6</p> <p>Plot point F at (9, 3). Tap the grid or type coordinates.</p>  <p>(<input type="text"/> , <input type="text"/>)</p>
<p>#7</p> <p>Plot point G at (1, 7). Tap the grid or type coordinates.</p>  <p>(<input type="text"/> , <input type="text"/>)</p>	<p>#8</p> <p>Plot point H at (6, 6). Tap the grid or type coordinates.</p>  <p>(<input type="text"/> , <input type="text"/>)</p>
<p>#9</p> <p>Plot point I at (8, 8). Tap the grid or type coordinates.</p>  <p>(<input type="text"/> , <input type="text"/>)</p>	<p>#10</p> <p>Plot point J at (0, 5). Tap the grid or type coordinates.</p>  <p>(<input type="text"/> , <input type="text"/>)</p>
<p>#11</p> <p>Plot point K at (10, 1). Tap the grid or type coordinates.</p>  <p>(<input type="text"/> , <input type="text"/>)</p>	<p>#12</p> <p>Plot point L at (4, 2). Tap the grid or type coordinates.</p>  <p>(<input type="text"/> , <input type="text"/>)</p>