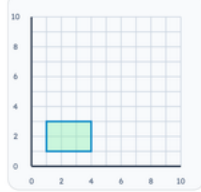
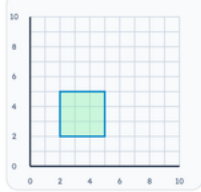
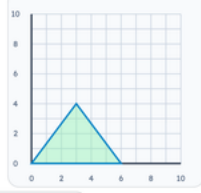
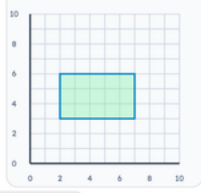
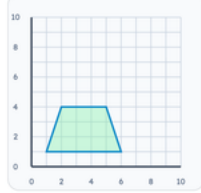

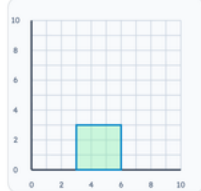
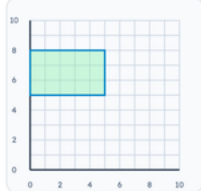
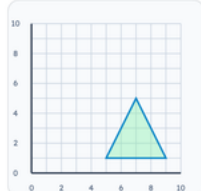
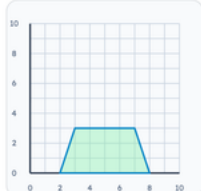
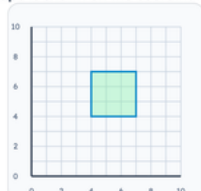



Grades 4–5 · Coordinates — name the shape
Printable from k5genie.com

Worksheet 45 · Coordinates — name the shape

Name each shape shown on the coordinate grid.

<p>#1 What shape is shown on the coordinate plane?</p>  <p>?</p>	<p>#2 What shape is shown on the coordinate plane?</p>  <p>?</p>
<p>#3 What shape is shown on the coordinate plane?</p>  <p>?</p>	<p>#4 What shape is shown on the coordinate plane?</p>  <p>?</p>
<p>#5 What shape is shown on the coordinate plane?</p>  <p>?</p>	<p>#6 What shape is shown on the coordinate plane?</p>  <p>?</p>
<p>#7 What shape is shown on the coordinate plane?</p>  <p>?</p>	<p>#8 What shape is shown on the coordinate plane?</p>  <p>?</p>
<p>#9 What shape is shown on the coordinate plane?</p>  <p>?</p>	<p>#10 What shape is shown on the coordinate plane?</p>  <p>?</p>
<p>#11 What shape is shown on the coordinate plane?</p>  <p>?</p>	<p>#12 What shape is shown on the coordinate plane?</p>  <p>?</p>