













Grades 4–5 · Clock — angle between hands
Printable from k5genie.com

Worksheet 56 · Clock — angle between hands

<p>#1</p>  <p>Clock shows 3:00 AM. Find the smaller angle between the hands.</p> <p>ANGLE BETWEEN HANDS</p> <input type="text"/>	<p>#2</p>  <p>Clock shows 6:00 AM. Find the smaller angle between the hands.</p> <p>ANGLE BETWEEN HANDS</p> <input type="text"/>
<p>#3</p>  <p>Clock shows 9:00 AM. Find the smaller angle between the hands.</p> <p>ANGLE BETWEEN HANDS</p> <input type="text"/>	<p>#4</p>  <p>Clock shows 12:00 AM. Find the smaller angle between the hands.</p> <p>ANGLE BETWEEN HANDS</p> <input type="text"/>
<p>#5</p>  <p>Clock shows 3:30 AM. Find the smaller angle between the hands.</p> <p>ANGLE BETWEEN HANDS</p> <input type="text"/>	<p>#6</p>  <p>Clock shows 1:00 AM. Find the smaller angle between the hands.</p> <p>ANGLE BETWEEN HANDS</p> <input type="text"/>
<p>#7</p>  <p>Clock shows 5:00 AM. Find the smaller angle between the hands.</p> <p>ANGLE BETWEEN HANDS</p> <input type="text"/>	<p>#8</p>  <p>Clock shows 2:00 AM. Find the smaller angle between the hands.</p> <p>ANGLE BETWEEN HANDS</p> <input type="text"/>
<p>#9</p>  <p>Clock shows 10:00 AM. Find the smaller angle between the hands.</p> <p>ANGLE BETWEEN HANDS</p> <input type="text"/>	<p>#10</p>  <p>Clock shows 8:00 AM. Find the smaller angle between the hands.</p> <p>ANGLE BETWEEN HANDS</p> <input type="text"/>
<p>#11</p>  <p>Clock shows 5:30 AM. Find the smaller angle between the hands.</p> <p>ANGLE BETWEEN HANDS</p> <input type="text"/>	<p>#12</p>  <p>Clock shows 1:30 AM. Find the smaller angle between the hands.</p> <p>ANGLE BETWEEN HANDS</p> <input type="text"/>