













Grades 4–5 · Angles — acute, right & obtuse
Printable from k5genie.com

Worksheet 55 · Angles — acute, right & obtuse

<p>#1</p>  <p>Is the opening acute, right, or obtuse? ANGLE TYPE <input type="text" value="Choose..."/></p>	<p>#2</p>  <p>Is the opening acute, right, or obtuse? ANGLE TYPE <input type="text" value="Choose..."/></p>
<p>#3</p>  <p>Is the opening acute, right, or obtuse? ANGLE TYPE <input type="text" value="Choose..."/></p>	<p>#4</p>  <p>Is the opening acute, right, or obtuse? ANGLE TYPE <input type="text" value="Choose..."/></p>
<p>#5</p>  <p>Is the opening acute, right, or obtuse? ANGLE TYPE <input type="text" value="Choose..."/></p>	<p>#6</p>  <p>Is the opening acute, right, or obtuse? ANGLE TYPE <input type="text" value="Choose..."/></p>
<p>#7</p>  <p>Is the opening acute, right, or obtuse? ANGLE TYPE <input type="text" value="Choose..."/></p>	<p>#8</p>  <p>Is the opening acute, right, or obtuse? ANGLE TYPE <input type="text" value="Choose..."/></p>
<p>#9</p>  <p>Is the opening acute, right, or obtuse? ANGLE TYPE <input type="text" value="Choose..."/></p>	<p>#10</p>  <p>Is the opening acute, right, or obtuse? ANGLE TYPE <input type="text" value="Choose..."/></p>
<p>#11</p>  <p>Is the opening acute, right, or obtuse? ANGLE TYPE <input type="text" value="Choose..."/></p>	<p>#12</p>  <p>Is the opening acute, right, or obtuse? ANGLE TYPE <input type="text" value="Choose..."/></p>