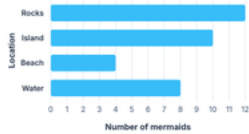


Worksheet 53 · Read bar graphs

**#1** The bar graph shows how many mermaids were in different locations.



How many fewer mermaids are on the beach than on the island?

fewer mermaids

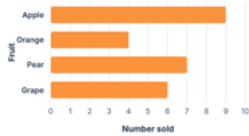
**#2** The bar graph shows books read by four students.



How many more books did Sam read than Lee?

more books

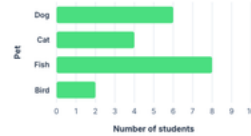
**#3** The bar graph shows fruit sold at a stand.



How many oranges and pears were sold in all?

pieces of fruit

**#4** The bar graph shows pets owned by students.



How many students have a dog or a cat?

students

**#5** The bar graph shows points scored in a game.



How many fewer points did Yellow score than Red?

fewer points

**#6** The bar graph shows bikes parked each day.



How many bikes were parked on Monday and Wednesday?

bikes


**#7** The bar graph shows stickers collected.



How many more star stickers than moon stickers?

more stickers

**#8** The bar graph shows cups of water students drank.



How many cups did Group B and Group C drink in all?

cups

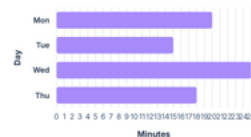
**#9** The bar graph shows trees planted in a park.



How many oak and maple trees were planted in all?

trees

**#10** The bar graph shows minutes spent on homework.



How many more minutes on Wednesday than Tuesday?

minutes