
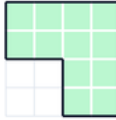

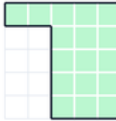




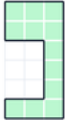





Grades 2–3 · Perimeter — count units around shape  
Printable from k5genie.com

Worksheet 42 · Perimeter — count units around shape

Count the unit lengths around each shape. Do not multiply — just count around the outside.

<p><b>#1</b> What is the perimeter of the shape?</p> <p>Each square is 1 unit. Count the units around the outside of the shape.</p>  <p><input type="text"/> units</p>	<p><b>#2</b> What is the perimeter of the shape?</p> <p>Each square is 1 unit. Count the units around the outside of the shape.</p>  <p><input type="text"/> units</p>
<p><b>#3</b> What is the perimeter of the shape?</p> <p>Each square is 1 unit. Count the units around the outside of the shape.</p>  <p><input type="text"/> units</p>	<p><b>#4</b> What is the perimeter of the shape?</p> <p>Each square is 1 unit. Count the units around the outside of the shape.</p>  <p><input type="text"/> units</p>
<p><b>#5</b> What is the perimeter of the shape?</p> <p>Each square is 1 unit. Count the units around the outside of the shape.</p>  <p><input type="text"/> units</p>	<p><b>#6</b> What is the perimeter of the shape?</p> <p>Each square is 1 unit. Count the units around the outside of the shape.</p>  <p><input type="text"/> units</p>
<p><b>#7</b> What is the perimeter of the shape?</p> <p>Each square is 1 unit. Count the units around the outside of the shape.</p>  <p><input type="text"/> units</p>	<p><b>#8</b> What is the perimeter of the shape?</p> <p>Each square is 1 unit. Count the units around the outside of the shape.</p>  <p><input type="text"/> units</p>
<p><b>#9</b> What is the perimeter of the shape?</p> <p>Each square is 1 unit. Count the units around the outside of the shape.</p>  <p><input type="text"/> units</p>	<p><b>#10</b> What is the perimeter of the shape?</p> <p>Each square is 1 unit. Count the units around the outside of the shape.</p>  <p><input type="text"/> units</p>
<p><b>#11</b> What is the perimeter of the shape?</p> <p>Each square is 1 unit. Count the units around the outside of the shape.</p>  <p><input type="text"/> units</p>	<p><b>#12</b> What is the perimeter of the shape?</p> <p>Each square is 1 unit. Count the units around the outside of the shape.</p>  <p><input type="text"/> units</p>