


Worksheet 46 · Count coins — up to \$1.50


Add up the money. Type your answer in cents.

#1  
What is the total value?  
  
 cents


#2  
What is the total value?  
  
 cents

#3  
What is the total value?  
  
 cents

#4  
What is the total value?  
  
 cents


#5  
What is the total value?  
  
 cents


#6  
What is the total value?  
  
 cents

#7  
What is the total value?  
  
 cents

#8  
What is the total value?  
  
 cents

#9  
What is the total value?  
  
 cents

#10  
What is the total value?  
  
 cents

#11  
What is the total value?  
  
 cents

#12  
What is the total value?  
  
 cents