




Worksheet 47 · Count coins + \$1 bills


Add up the money. Type your answer in cents.

#1
What is the total value?


 cents

#2
What is the total value?


 cents

#3
What is the total value?




 cents


#4
What is the total value?


 cents


#5
What is the total value?


 cents

#6
What is the total value?


 cents

#7
What is the total value?


 cents

#8
What is the total value?


 cents

#9
What is the total value?




 cents

#10
What is the total value?


 cents

#11
What is the total value?


 cents

#12
What is the total value?


 cents