













Worksheet 34 · Clock — nearest minute

<p>#1</p>  <p>HOUR MINUTE □ : □ AM</p>	<p>#2</p>  <p>HOUR MINUTE □ : □ AM</p>
<p>#3</p>  <p>HOUR MINUTE □ : □ AM</p>	<p>#4</p>  <p>HOUR MINUTE □ : □ AM</p>
<p>#5</p>  <p>HOUR MINUTE □ : □ AM</p>	<p>#6</p>  <p>HOUR MINUTE □ : □ AM</p>
<p>#7</p>  <p>HOUR MINUTE □ : □ AM</p>	<p>#8</p>  <p>HOUR MINUTE □ : □ AM</p>
<p>#9</p>  <p>HOUR MINUTE □ : □ AM</p>	<p>#10</p>  <p>HOUR MINUTE □ : □ AM</p>
<p>#11</p>  <p>HOUR MINUTE □ : □ AM</p>	<p>#12</p>  <p>HOUR MINUTE □ : □ AM</p>